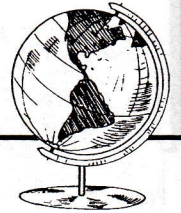


Mapping Skills

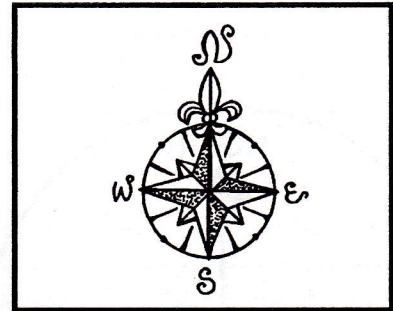
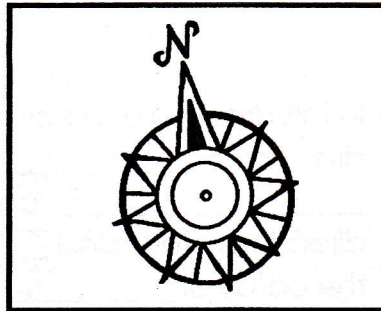



Compass Rose

Part B:


A _____ usually has a symbol called a _____.

Below are some examples.




The purpose of the compass rose is to show the _____ directions: _____ (N), _____ (E), _____ (S), _____ (W).

Some compass roses just show N for _____. Directly below north is _____, to the right is _____ and to the left is _____.



Label the following compass rose by printing the cardinal and intermediate directions on it. Beside each abbreviation write the full word on the line.



1. N = _____
2. E = _____
3. SW = _____
4. NW = _____
5. SE = _____
6. NE = _____
7. S = _____
8. W = _____

If a compass rose is not on a map, the _____ of the map is usually _____.